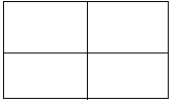

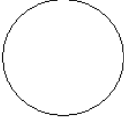








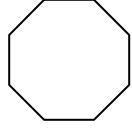


## July Summer Math Calendar - Entering Grade 2

Solve one problem each day for the month of July. Show your work and your answer in the blue book provided.

<u>Date</u>	<u>Questions</u>	<u>Date</u>	<u>Questions</u>
7/1	Write the number that is 10 and 4 ones.	7/9	Write the numbers in order from greatest to least.  45 67 89 54
7/2	Annie collects marbles. She has 5 pink marbles, 4 red marbles and 6 green marbles. How many marbles does she have in all?	7/10	Circle the ones place. Underline the tens place.  23 95 78 31 57 64
7/3	 Shade $\frac{1}{4}$	7/11	Write 3 names for 40.
7/4	 Name the solid.	7/12	Subtraction 7-4=_____      8      15 _____ = 9-3 <u>-2</u> <u>-8</u>
7/5	Name the shape.  	7/13	What time is it? 
7/6	Draw 7:00. 	7/14	Draw half past 3. 
7/7	Two people share these tennis balls equally. How many balls does each person get? 	7/15	How much money is each coin worth? 
7/8	5+5=_____ 4+2=_____ _____= 2+9	7/16	10-2=_____ 8-4=_____      9-_____=3 _____ = 3-1

Parent signature \_\_\_\_\_

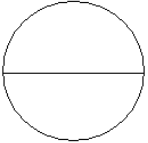
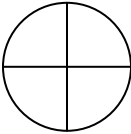

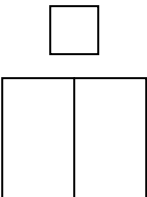
July Summer Math Calendar - Entering Grade 2

<u>Date</u>	<u>Questions</u>	<u>Date</u>	<u>Questions</u>
7/17	Add: 4+5=_____ 10+6=_____ 40+50=_____ 20+4=_____ 400+500=_____ 50+4=_____	7/25	Add 52    36    43    62 <u>+12</u> <u>+12</u> <u>+10</u> <u>+7</u>
7/18	How much money? Ⓚ Ⓚ   Ⓚ Ⓚ	7/26	Finish the pattern. 2,4,6,____, ____, ____
7/19	Draw half past 10. 	7/27	Draw blocks to show 53. <u>Tens</u> <u>Ones</u>     _____
7/20	Use >, <, and = . 45 ____ 54          5+5 ____ 6+4 13 ____ 10+20	7/28	Which line is the shortest? A. _____ B. _____ C. _____
7/21	What shape is this? 	7/29	Write 3 names for 25.
7/22	There are 14 children sitting at the table. 8 children leave. How many children are left at the table?	7/30	Write 2 related subtraction facts for 5+6=11.
7/23	Make a fact family for the numbers 4, 8, 12	7/31	Draw a square and divide it in half 3 different ways.
7/24	What number am I? 		 Don't forget to study your addition and subtraction facts!

Parent signature \_\_\_\_\_

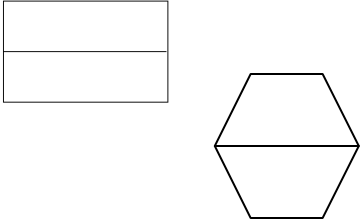



## August Summer Math Calendar - Entering Grade 2

Solve one problem each day for the month of August. Show your work and your answer in the blue book provided.

<u>Date</u>	<u>Questions</u>	<u>Date</u>	<u>Questions</u>
8/1	$\begin{array}{r} 38 \quad 10 \quad 15 \quad 24 \\ -11 \quad -1 \quad -12 \quad -20 \end{array}$	8/9	Add $2+5= \square$  $20+50= \square$
8/2	Shade the fraction for shape.  $\frac{1}{2}$	8/10	$\underline{\quad} = 8 - 4$ $9 - \underline{\quad} = 3$ $13 - \underline{\quad} = 7$ $18 - 9 = \underline{\quad}$
8/3	Use $<$ , $>$ , $=$  $52 \square 25$	8/11	Draw a rhombus.
8/4	Write 3 even numbers.  $\underline{\quad}, \underline{\quad}, \underline{\quad}$	8/12	A store has 34 basketballs. They sell 10. How many basketballs does the store have now?
8/5	$15 - 9 =$ $20 - 10 =$ $\underline{\quad} - 4 = 8$ $13 - \underline{\quad} = 6$	8/13	Use $<$ , $>$ , $=$ .  $76 \underline{\quad} 96$
8/6	Show the fraction $\frac{1}{2}$ .  	8/14	Write the odd numbers between 10 and 20.
8/7	Continue the pattern.  $5, 8, \underline{\quad}, 14, \underline{\quad}$	8/15	Two people share 12 toy cars evenly. How many do they each get?  
8/8	Draw parts to show the number 15.  	8/16	Continue the pattern.  $1, 3, 5, \underline{\quad}, \underline{\quad}, \underline{\quad}, \underline{\quad}$ .

Parent signature \_\_\_\_\_

August Summer Math Calendar - Entering Grade 2

<u>Date</u>	<u>Questions</u>	<u>Date</u>	<u>Questions</u>
8/17	Draw a triangle.	8/25	Solve: $6+2=$ _____ $8+$ _____ = 9 $3+5=$ _____ $3+$ _____ = 7
8/18	Shade $\frac{1}{2}$ of each shape 	8/26	How much money? 
8/19	Draw the hands to show 11:00. 	8/27	Add: $3+4=$ _____ $30+40=$ _____ $300+400=$ _____
8/20	Solve: $8-2=$ _____ $6-3=$ _____ $4-$ _____ = 1 _____ = $7-2$	8/28	Solve $27 + 36$ Draw tens and ones and regroup.
8/21	Add: $6+2=$ _____ $60+20=$ _____ $600+200=$ _____	8/29	Circle the larger number in each pair. 23 or 32                      81 or $60 + 30$
8/22	Draw the hands: 3:30 	8/30	Name 3 objects shaped like a sphere.
8/23	Which line is the longest? A. _____ B. _____ C. _____	8/31	Write 5 names for 60.
8/24	Solve: Mary bought 13 candies. Jane bought 22. How many candies did the girls buy in all?		Best wishes for a great year in grade 2. Brush up on addition, subtraction and related facts within 20. ☺

Parent signature \_\_\_\_\_